


Count in 2s



1 Count in 2s to find the total.

a How many salt and pepper pots are there?



There are _____ salt and pepper pots in total.

b How many flip-flops are there?



There are _____ flip-flops in total.

c How many shoes are there?



There are _____ shoes in total.

d How many socks are there?




There are _____ socks in total.

e How many mittens are there?



There are _____ mittens in total.

f How many cherries are there?

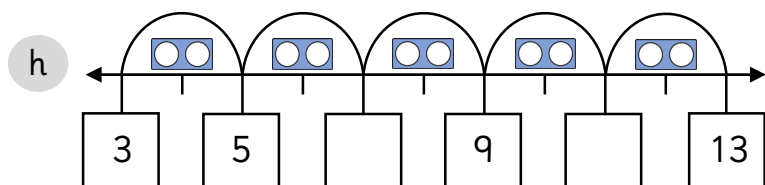
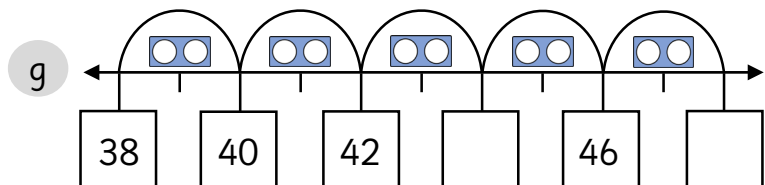
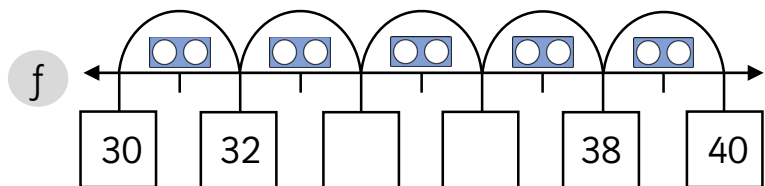
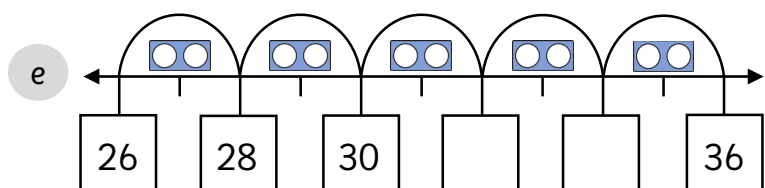
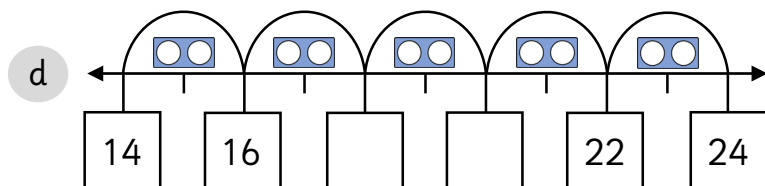
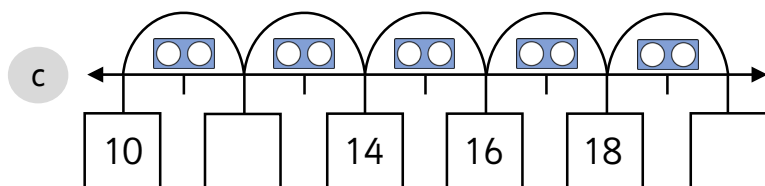
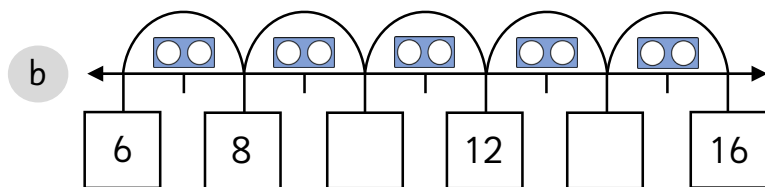
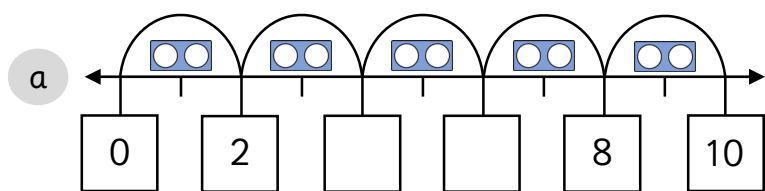


There are _____ cherries in total.

Count in 2s



1 Count in 2s to complete the number lines.



Count in 2s



1 Count in 2s to find the total.

a How many shoes are there?



There are _____ shoes in total.

b How many flip-flops are there?



There are _____ flip-flops in total.

c How many cherries are there?



There are _____ cherries in total.

2 Complete the number tracks.

a

6			12			18			24
---	--	--	----	--	--	----	--	--	----

b

		5				13	15		19
--	--	---	--	--	--	----	----	--	----

c

18				26		30		34	
----	--	--	--	----	--	----	--	----	--

d

	28	30				38	40		
--	----	----	--	--	--	----	----	--	--

e

25				33	35				43
----	--	--	--	----	----	--	--	--	----

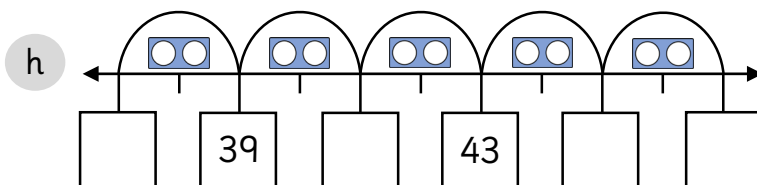
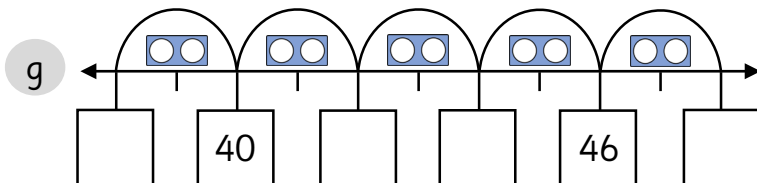
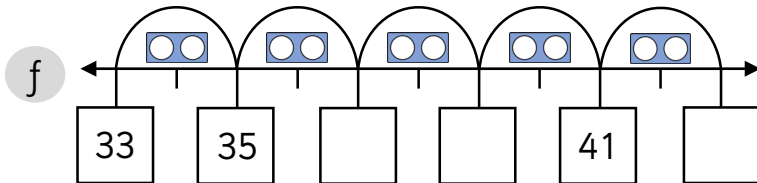
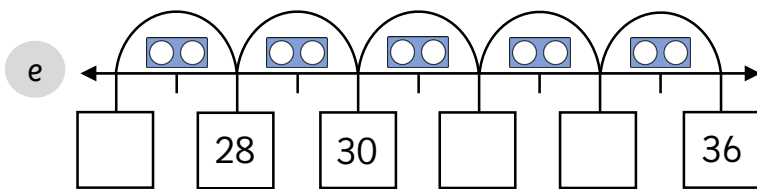
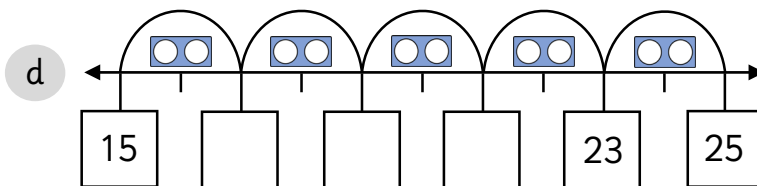
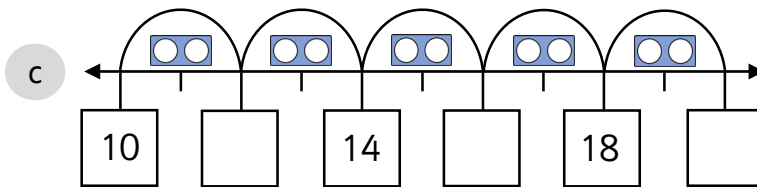
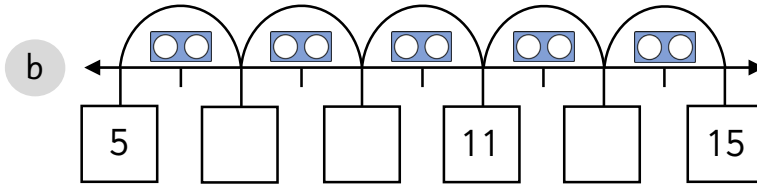
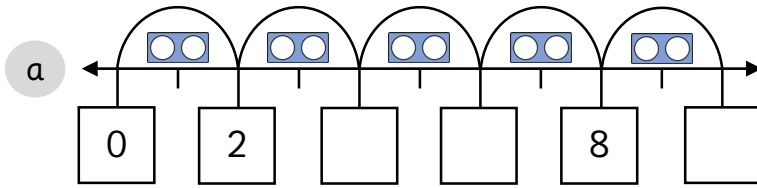
f

	34			40	42	44			
--	----	--	--	----	----	----	--	--	--

Count in 2s



1 Count in 2s to complete the number lines.



1 Complete the number tracks.

a	6					16				24
---	---	--	--	--	--	----	--	--	--	----

b	1	3								19
---	---	---	--	--	--	--	--	--	--	----

c		20						32		36
---	--	----	--	--	--	--	--	----	--	----

d	26									44
---	----	--	--	--	--	--	--	--	--	----

e					33					43
---	--	--	--	--	----	--	--	--	--	----

f								46		50
---	--	--	--	--	--	--	--	----	--	----

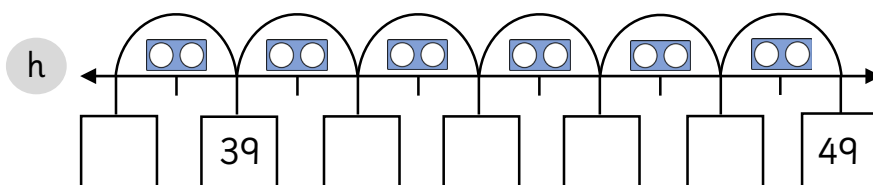
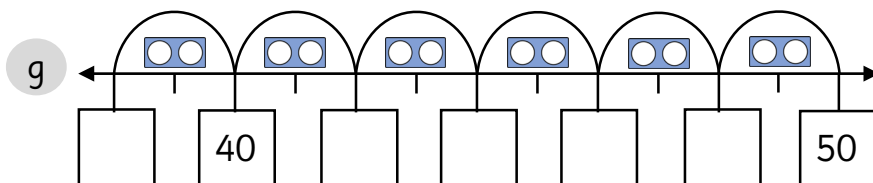
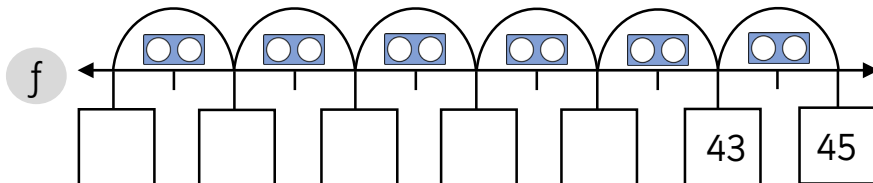
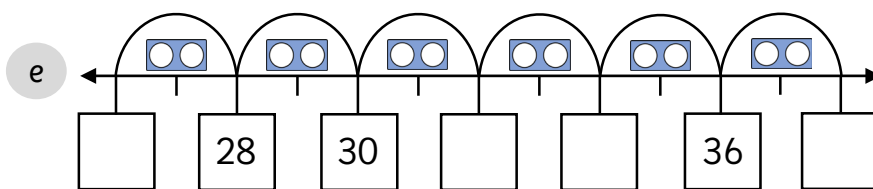
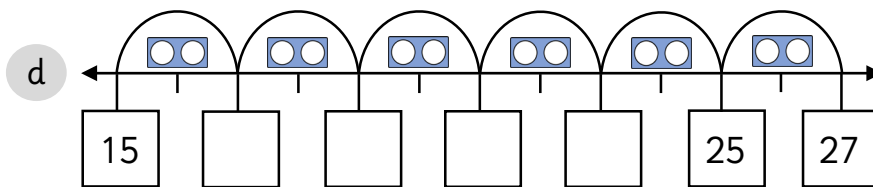
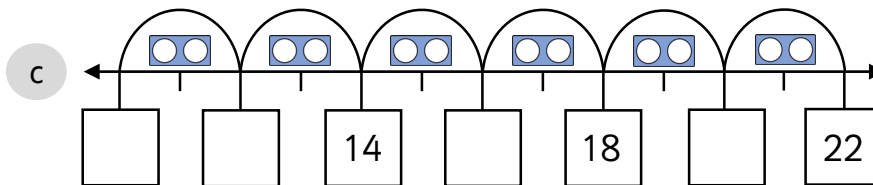
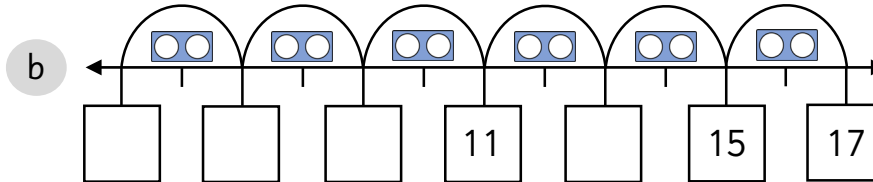
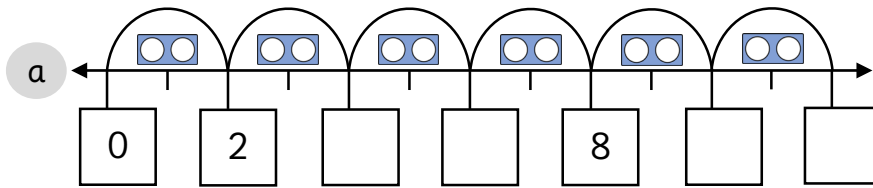
2 Complete the following word problems.

- a There are 8 pencils. There are 2 pencils in each pot.
How many pots are there? _____.
- b There are 20 apples. There are 2 apples in each bowl.
How many bowls are there? _____.
- c There are 18 fish. There are 9 fish in each tank.
How many fish tanks are there? _____.
- d There are 14 sweets. There are 7 sweets in each bag.
How many bags are there? _____.

Count in 2s



1 Count in 2s to complete the number lines.



Count in 2s



The 8th number on the number track below would be 38.

24	26	28	30	32
----	----	----	----	----

True or false? Explain how you know.

If there are 2 sweets in each bag and there are 18 sweets in total.

How many bags of sweets are there?

You may draw pictures to help you.



I am counting in 2s from the number 3.

I will say the number 12.

Is Asha correct?
Explain how you know.



Dom

I have 5 pairs of shoes.



Matt

I have 12 of shoes in total.

Who has the most shoes?
Explain how you know.

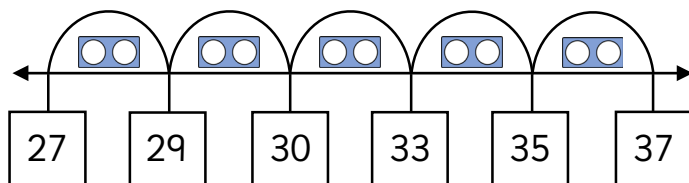
16	13	12	14
----	----	----	----

Mo is counting in 2s from 8.

Which number is the odd one out?

Explain how you know.

Spot and explain the mistake.



Continue the number track.